

Name _____ Date _____ Period _____

Math Homework 17

1. Using a scale factor of 3 and a ruler, create a scale drawing in inches:




1 in.

Name _____ Date _____ Period _____

Math Homework 17

1. Using a scale factor of 3 and a ruler, create a scale drawing in inches:




1 in.

Find the scale factor using the given scale drawings and measurements below.

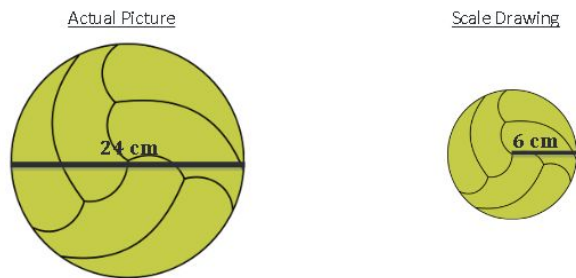
2. Scale factor : _____

Is this an enlargement
or a reduction?



3. Scale factor : _____


Is this an enlargement or a
reduction?



Find the scale factor using the given scale drawings and measurements below.

2. Scale factor : _____

Is this an enlargement
or a reduction?



3. Scale factor : _____

Is this an enlargement or a
reduction?

